



Summer Work Challenge




Welcome to First Grade! Mrs. Seaman and Ms. Galentine are excited to have you in our class next year. To keep your brain strong and have everything you need to be successful in first grade, we have prepared summer learning options for you to practice your math, reading and writing skills. Read the instructions for the Math Challenge, First Grade Skills pages, Reading Challenge and Writing Challenge. **Make sure to color ALL your coins and return the challenge pages along with your most accomplished piece of writing on Orientation Day.**



MATH Challenge

Pick a way to keep your "Math Brain" sharp on the choice board. Each time you complete the challenge, color in a coin! Color ALL the coins by Orientation Day!

Roll 2 Dice and add how many dots all together.	Count to 50 with <u>Jack Hartmann</u>	Practice counting backwards from 50 with <u>Jack Hartmann</u>	Use objects to make groups of 10
Play Go Fish with your family	Count as high as you can in 1 minute.	Add items in your pantry	Build something with legos. How many legos did you use?
Match all the socks in your drawer then use them to count by 2's	Use a ruler to measure 5 objects in your home	Trace, draw, or color 10 shapes. Tell which shapes you made.	Practice counting to 100 by 10's with <u>Jack Hartmann</u>
Practice counting to 100 by 5's with <u>Jack Hartmann</u>	Make shapes with playdough	Make a pattern with objects in your home or in nature.	Complete the 50's Workout.
How many ways can you make 10? Use pictures and numbers.	Make patterns with shapes, numbers, or objects	Go on a walk and find pairs of objects outside	Write as many numbers as you can.





READING Challenge

Reading is EVERYWHERE! Each time you complete the challenge, color in a coin!
Color ALL the coins by Orientation Day!

Heggerty Monday video	Read a book with your family	Pick one or two heggerty skill tutorials	Sight Words 3 with Jack Hartmann
Read a book with a flashlight	Heggerty Tuesday Video	Sight Words 2 with Jack Hartmann	Silly Letter Sound song with Jack Hartmann
Read a book outside.	Read a nonfiction story.	Heggerty Wednesday video	Pick one or two heggerty skill tutorials
Practice your phonics sounds with English4abc.	Read with to your pet or stuffed animal	Read to a stuffed animal.	Heggerty Thursday video
Heggerty Friday video	Sight Words 1 with Jack Hartmann	Exercise, Rhyme, Freeze with Jack Hartmann	Practice your phonics sounds with English4abc.



WRITING Challenge

Unleash your inner WRITER! Experiment with different types of writing and try as many options as you can. On Orientation Day, bring your most accomplished piece – the one that makes you truly proud.

Practice writing your first and last name with a pencil.	Draw a picture of something you see outside.	Write your computer logon and password in rainbow colors	Draw a picture of you and your family
Write about something you did this summer	Practice sight words with rainbow colors	Write about a story you read or was read to you	Draw a picture of your favorite show or movie.
Write all uppercase letters	Label things in your home with sticky notes	Draw a picture of something you did this summer.	Practice writing numbers to 25
Draw a picture of you and a friend.	Practice typing your computer logon and password	Practice building sight words with playdough	Draw pictures of the steps to make your favorite snack
Practice building sight words	Draw a picture from your favorite book.	Write about your favorite stuffed animal or pet	Write all lowercase letters

First Grade Skills

- Write first and last name
- Practice your computer usernames and passwords
- Count and write to 50
- Recognize numbers to 100
- Recognize patterns all around you
- Begin to identify sight words from Kindergarten
- Draw basic shapes and portraits
- Listen to a story and answer
 - Who is the story about
 - What is the story about
 - Where does the story take place
 - When did the story happen

LINKED PRACTICE PAGES/VIDEOS

[Heggerty Practice Videos](#)

[Exercise, Rhyme, Freeze](#)

[Silly Letter Sound song](#)

[Sight Words 1](#)

[Sight Words 2](#)

[Sight Words 3](#)

[Jack Hartmann Count to 50](#)

[Jack Hartmann Count by 5's](#)

[Jack Hartmann Count by 10's](#)

[English4abc - Phonics Practice](#)

The 50's Workout

- Do jumping jacks counting by 2's all the way to 50
- Do toe touches counting by 5's all the way to 50
- Do push-ups counting by 10's all the way to 50



Summer BLESSINGS



Lord God, Creator of all things, guide our steps and strengthen our hearts, during these months of summer and vacation days. Grant us refreshment of mind and body. We ask this through Christ our Lord.

FREE Sample Kindergarten No-Prep Math Summer Review


Count & Graph


Name: _____

Color by Tally

4 =  5 = 

6 =  7 = 

8 = 

9 = 



Thank you for your purchase!

Please leave a comment and rating after downloading my products (You get TPT credits each time you do!). Also, click the "Follow Me" button by my picture to be the first to know about my newest products and freebies. Your support is greatly appreciated!

Credits

A special thanks to these contributors for their adorable clipart!



Name: _____



10 11 12 13 14 15
16 17 18 19 20



10 11 12 13 14 15
16 17 18 19 20



10 11 12 13 14 15
16 17 18 19 20

Draw 11 cherries.









Draw 14 spoons.

Color in 13







Name: _____

What's the Missing Number?

1	2	3	4	5	6	7	8	9	10
11		13	14	15	16	17	18	19	20
21	22	23	24	25		27	28	29	30
31	32	33	34	35	36	37	38	39	
41	42	43	44	45	46	47	48	49	50
51	52	53		55	56	57	58	59	60
61	62	63	64	65	66	67	68		70
71	72	73	74	75	76		78	79	80
81	82	83	84	85		87	88	89	90
	92	93	94	95	96	97	98	99	100




 =
 =
 =
 =

 =
 =
 =
 =

Name: _____

Summer Water Fun

Our Favorite Water Activities

	1	2	3	4	5	6	7
Slip + Slide 							
Swimming 							
Water Balloons 							

1. Which activity did the most people like?

2. Which activity did the fewest people like?

3. How many kids like water balloons? _____

4. How many kids like swimming? _____

5. How many more kids like slip and slide than swimming? _____

6. How many more kids like water balloons than swimming? _____

Name: _____

Subtraction Facts

$\begin{array}{r} 4 \\ -1 \\ \hline \end{array}$	$\begin{array}{r} 3 \\ -2 \\ \hline \end{array}$	$\begin{array}{r} 1 \\ -1 \\ \hline \end{array}$	$\begin{array}{r} 9 \\ -1 \\ \hline \end{array}$	$\begin{array}{r} 5 \\ -2 \\ \hline \end{array}$	$\begin{array}{r} 6 \\ -6 \\ \hline \end{array}$	$\begin{array}{r} 2 \\ -1 \\ \hline \end{array}$
$\begin{array}{r} 7 \\ -2 \\ \hline \end{array}$	$\begin{array}{r} 3 \\ -3 \\ \hline \end{array}$	$\begin{array}{r} 4 \\ -2 \\ \hline \end{array}$	$\begin{array}{r} 5 \\ -3 \\ \hline \end{array}$	$\begin{array}{r} 2 \\ -2 \\ \hline \end{array}$	$\begin{array}{r} 6 \\ -1 \\ \hline \end{array}$	$\begin{array}{r} 9 \\ -2 \\ \hline \end{array}$
$\begin{array}{r} 10 \\ -2 \\ \hline \end{array}$	$\begin{array}{r} 4 \\ -0 \\ \hline \end{array}$	$\begin{array}{r} 10 \\ -8 \\ \hline \end{array}$	$\begin{array}{r} 7 \\ -3 \\ \hline \end{array}$	$\begin{array}{r} 6 \\ -2 \\ \hline \end{array}$	$\begin{array}{r} 8 \\ -4 \\ \hline \end{array}$	$\begin{array}{r} 9 \\ -4 \\ \hline \end{array}$
$\begin{array}{r} 5 \\ -5 \\ \hline \end{array}$	$\begin{array}{r} 3 \\ -1 \\ \hline \end{array}$	$\begin{array}{r} 5 \\ -4 \\ \hline \end{array}$	$\begin{array}{r} 6 \\ -4 \\ \hline \end{array}$	$\begin{array}{r} 9 \\ -8 \\ \hline \end{array}$	$\begin{array}{r} 5 \\ -2 \\ \hline \end{array}$	$\begin{array}{r} 10 \\ -9 \\ \hline \end{array}$
$\begin{array}{r} 4 \\ -1 \\ \hline \end{array}$	$\begin{array}{r} 7 \\ -2 \\ \hline \end{array}$	$\begin{array}{r} 6 \\ -5 \\ \hline \end{array}$	$\begin{array}{r} 10 \\ -4 \\ \hline \end{array}$	$\begin{array}{r} 10 \\ -0 \\ \hline \end{array}$	$\begin{array}{r} 8 \\ -6 \\ \hline \end{array}$	$\begin{array}{r} 9 \\ -0 \\ \hline \end{array}$

Name: _____

Addition Story Problems

Draw a picture to solve. Write the number sentence.

1. Jack threw 4 water balloons and Kelly threw 5. How many did they throw all together?

$$\underline{\quad\quad} + \underline{\quad\quad} = \underline{\quad\quad}$$

2. There were 2 girls and 6 boys in the pool. How many people were in the pool?

$$\underline{\quad\quad} + \underline{\quad\quad} = \underline{\quad\quad}$$

3. Lou jumped across the sprinkler 8 times. Lil jumped across the sprinkler 2 times. How many times did they jump across the sprinkler all together?

$$\underline{\quad\quad} + \underline{\quad\quad} = \underline{\quad\quad}$$

4. Kate had 3 bathing suits. Her mom bought her one more. How many does she have now?

$$\underline{\quad\quad} + \underline{\quad\quad} = \underline{\quad\quad}$$

5. The twins had 3 pool toys. Their friends brought 3 more over to the pool party. How many do they have now?

$$\underline{\quad\quad} + \underline{\quad\quad} = \underline{\quad\quad}$$

6. Alyssa swam 5 laps on Monday and 3 laps on Tuesday. How many laps did she swim all together?

$$\underline{\quad\quad} + \underline{\quad\quad} = \underline{\quad\quad}$$

You May Also Like....

Thank you for uploading this product! If you enjoyed this activity, you may also like these items from my store"

